



Name _____

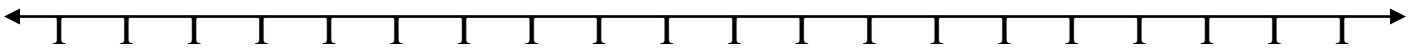
Date _____

Please visit www.worksheetsandwalkthroughs.com for more worksheets on this topic.

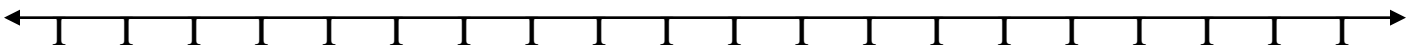
Measurement and Data- Elapsed Time
Worksheet
(4. MD.2)

Directions: Use the number lines to help you find how much time has elapsed.

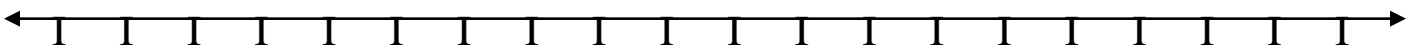
① 12:30 pm to 9:00 pm = hrs mins



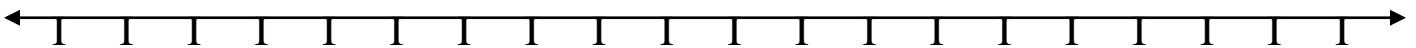
② 6:45 am to 10:15 am = hrs mins



③ 2:05 pm to 3:30 pm = hrs mins



④ 11:45 am to 3:15 pm = hrs mins





Name _____

Date _____

KEY

- ① 12:30 pm to 9:00 pm = 8 hrs 30 min

- ② 6:45 am to 10:15 am = 3 hrs 30 min

- ③ 2:05 pm to 3:30 pm = 1 hrs 25 min

- ④ 11:45 am to 3:15 pm = 3 hrs 30 min